




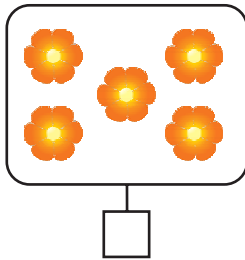

Numele: _____

Data: _____

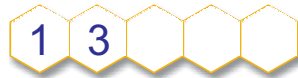
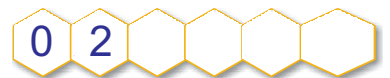
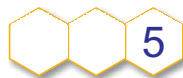


Test de evaluare

1. Scrie câte flori sunt în fiecare mulțime:



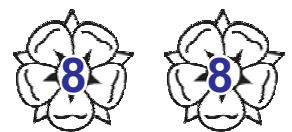
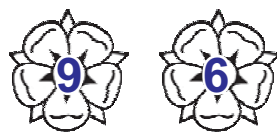
2. Scrie numerele care lipsesc:



3. Ordonează crescător, apoi descrescător, numerele:



4. Colorează, din fiecare pereche, cu **roșu** floarea cu număr mai mare, cu **albastru** pe cea cu număr mai mic și cu **galben** pe cele cu numere egale.



5. Compară numerele:

2	<	4		6	6		1	0	9		2	0
1		5		8	7		8	9		4	4	



6. Colorează și completează pentru a compune numerele:

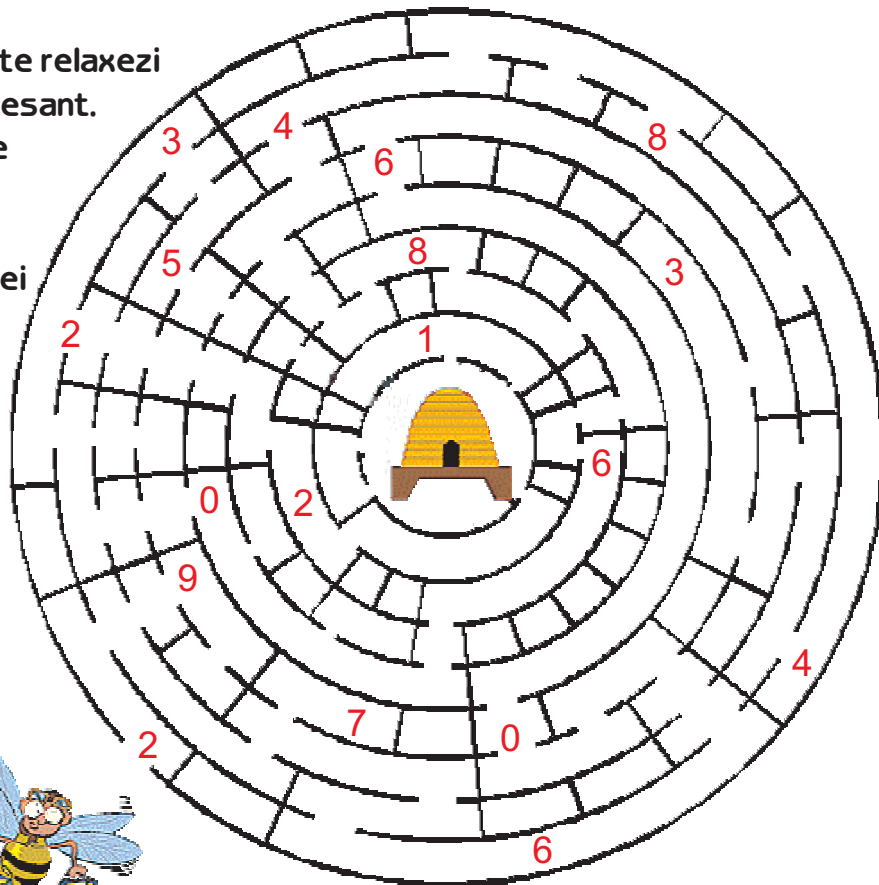
7. Descompune numerele:

Ai terminat?

Verifică tot testul ca să nu îți scape vreo greșeală!



Acum poți să te relaxezi
cu un joc interesant.
Numerele pare
te vor ajuta
să găsești
drumul albinuței
prin labirint.





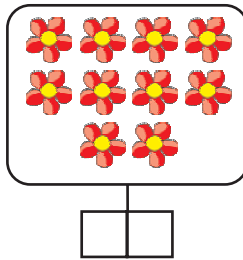
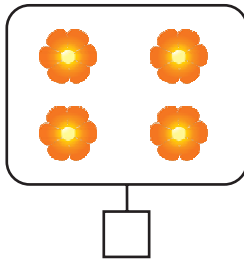

Numele: _____

Data: _____

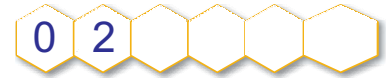
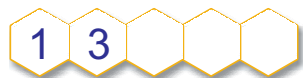
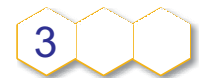
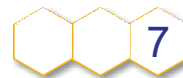
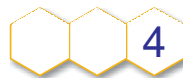
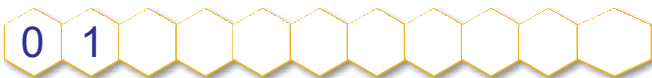


Test de evaluare

1. Scrie câte flori sunt în fiecare mulțime:



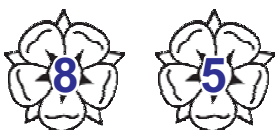
2. Scrie numerele care lipsesc:



3. Ordonează crescător, apoi descrescător, numerele:



4. Colorează, din fiecare pereche, cu **roșu** floarea cu număr mai mare, cu **albastru** pe cea cu număr mai mic și cu **galben** pe cele cu numere egale.



5. Compară numerele:

3	<	5		4	6		1	0	7		0	0
7	5		8	9		9	8		4	1		



6. Colorează și completează pentru a compune numerele:

7. Descompune numerele:

Ai terminat?

Verifică tot testul ca să nu îți scape vreo greșeală!



Acum poți să te relaxezi
cu un joc interesant.
Numerele pare
te vor ajuta
să găsești
drumul albinuței
prin labirint.

